

Name:

MWF 9 Oliver Knill
MWF 10 Hansheng Diao
MWF 10 Joe Rabinoff
MWF 11 John Hall
MWF 11 Meredith Hegg
MWF 12 Charmaine Sia
TTH 10 Bence Béky
TTH 10 Gijs Heuts
TTH 11:30 Francesco Cavazzani
TTH 11:30 Andrew Cotton-Clay

- Start by printing your name in the above box and **check your section** in the box to the left.
- Do not detach pages from this exam packet or unstaple the packet.
- Please write neatly. Answers which are illegible for the grader cannot be given credit.
- **Show your work.** Except for problems 1-3, we need to see details of your computation.
- No notes, books, calculators, computers, or other electronic aids can be allowed.
- You have 180 minutes time to complete your work.

1		20
2		10
3		10
4		10
5		10
6		10
7		10
8		10
9		10
10		10
11		10
12		10
13		10
14		10
Total:		150

Problem 1) True/False questions (20 points). No justifications are needed.

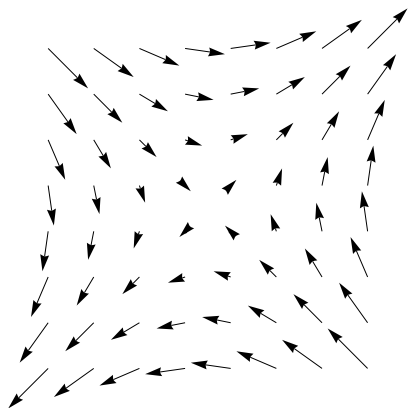
- 1) T F The function $f(x, y, z) = x^2 - y^2 - z^2$ increases in the direction $\langle -3, -1, 2 \rangle / \sqrt{14}$ at the point $(1, 1, 1)$.
- 2) T F The unit tangent vector of the curve $\vec{r}(t) = \langle 3t, 4t, t^2 \rangle$ at time $t = 0$ is $\langle 3/5, 4/5, 0 \rangle$.
- 3) T F There exist two nonzero vectors \vec{a} and \vec{b} such that the length of the vector projection of \vec{a} to $\vec{a} \times \vec{b}$ is $\frac{1}{2}|\vec{b}|$.
- 4) T F The arc length of the curve $\vec{r}_1(t) = \langle e^{3t^3} - 1, t^6 + 2, \sin(2t^3) \rangle$, $0 \leq t \leq 1$ is larger than that of $\vec{r}_2(t) = \langle e^{3t} - 1, t^2 + 2, \sin(2t) \rangle$, $0 \leq t \leq 1$.
- 5) T F The tangent plane of the graph of $f(x, y) = \sin(x) + y^3$ at $(0, 1, 1)$ is $x + 3y = 3$.
- 6) T F There exists a curve C on the level surface of $f(x, y, z) = x^3 + e^{yz} + \cos(y) = 2$ such that the line integral $\int_C \nabla f \cdot d\vec{r} > 0$.
- 7) T F If Q is the point away from the plane $3x + 5y + z = 7$ and P is the point on the plane closest to Q , then \vec{PQ} is parallel to $\langle 3, 5, 1 \rangle$.
- 8) T F The vector field $\vec{F}(x, y, z) = \langle y^2 - xz + e^y, -yz, x^4 + y^2 - z^2 \rangle$ is the curl of a vector field \vec{G} .
- 9) T F Let $\vec{F}(x, y) = \langle P(x, y), Q(x, y) \rangle = \langle \frac{-y}{x^2+y^2}, \frac{x}{x^2+y^2} \rangle$ and C be the unit circle oriented counterclockwise. Since $Q_x = P_y$ everywhere, Green implies $\int_C \vec{F} \cdot d\vec{r} = 0$.
- 10) T F By linear approximation of the function $f(x, y, z) = e^{x+y+z}$ we can estimate $f(0.1, 0.01, 0.001)$ as 1.111.
- 11) T F If $\vec{F}(x, y, z)$ is a vector field defined on $0 < x^2 + y^2 + z^2 < 4$ and $\text{curl}(\vec{F}) = 0$ everywhere on this solid, then $\vec{F} = \nabla f$ for some function f .
- 12) T F The tangent plane of the surface $x^2 + y^4 + z^6 = 6$ at $(2, 1, 1)$ is perpendicular to the line $\vec{r}(t) = \langle 1 + 2t, 3 + 2t, -4 + 3t \rangle$.
- 13) T F Given two curves $C_1 : \vec{r}_1(t) = \langle t, t^3 \rangle$, $0 \leq t \leq 1$ and $C_2 : \vec{r}_2(s) = \langle s, s^5 \rangle$, $0 \leq s \leq 1$ $f(x, y) = \sin(x^2y)$. Then $\int_{C_1} \nabla f \cdot d\vec{r} = \int_{C_2} \nabla f \cdot d\vec{r}$.
- 14) T F If $f(x, y)$ has a global maximum, then the discriminant function $D(x, y) = f_{xx}f_{yy} - f_{xy}^2$ has a global maximum.
- 15) T F Let $\vec{F}(x, y, z) = \langle x, y, z \rangle$ and S the surface boundary of the cube $0 \leq x \leq 1, 0 \leq y \leq 1, 0 \leq z \leq 1$ oriented by outward normal vectors. Then $\int \int_S \vec{F} \cdot d\vec{S} = 0$.
- 16) T F Let $\vec{F}(x, y, z) = \langle x/3, y/3, z/3 \rangle$ and S the unit sphere oriented by the outward normal vectors. Then $\int \int_S \text{curl}(\vec{F}) \cdot d\vec{S}$ is the volume of the unit ball.
- 17) T F In three dimensional space there exist two nonzero vector fields \vec{F} and \vec{G} such that $\text{curl}(\vec{F}) = \text{div}(\vec{G})$.
- 18) T F The vector field $\vec{F}(x, y, z) = \langle \cos(y), \cos(z), \cos(x) \rangle$ has the property that $\vec{F} = \text{curl}(\text{curl}(\vec{F}))$.
- 19) T F There exists a vector field $\vec{F}(x, y, z)$ defined on \mathbf{R}^3 such that every line integral $\int_C \vec{F} \cdot d\vec{r}$ of \vec{F} over a closed curve C is equal to 0, but not every surface integral $\int \int_S \vec{F} \cdot d\vec{S}$ over a closed surface S is equal to 0.
- 20) T F Whenever $\vec{F} = \nabla f$, for some function $f(x, y)$ defined on the annulus $\frac{1}{2} \leq x^2 + y^2 \leq 2$, then $\int_C \vec{F} \cdot d\vec{r} = 0$, where C is the circle $x^2 + y^2 = 1$.

Problem 2) (10 points)

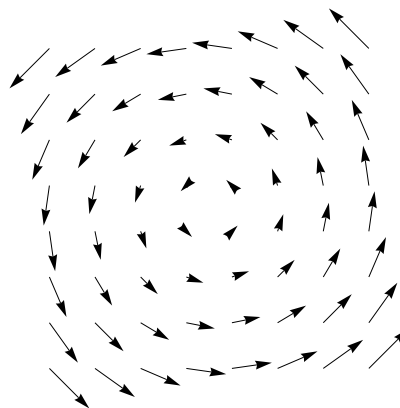
a) (5 points) We match in this problems vector fields with properties of vector fields and formulas for vector fields. A field \vec{F} is **divergence free** if $\text{div}(\vec{F}) = 0$ everywhere in the plane. A field \vec{F} is **irrotational**, if $\text{curl}(\vec{F}) = \vec{0}$ everywhere in the plane. In the last two columns of the following table, check the boxes which apply.

field	enter I-IV	divergence free	irrotational
$\vec{F}(x, y) = \langle -y, x \rangle$			
$\vec{F}(x, y) = \langle y, x \rangle$			
$\vec{F}(x, y) = \langle -x - y, x - y \rangle$			
$\vec{F}(x, y) = \langle x + y, x + y \rangle$			

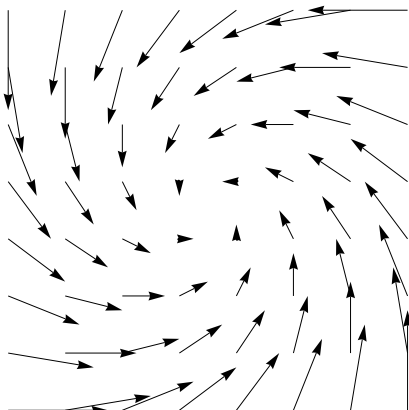
I




II



III



IV



b) (5 points) Match the following names of partial differential equations with functions $u(t, x)$ which satisfy the differential equation and with formulas defining these equations.

equation	A-D	1-4
wave		
heat		
transport		
Laplace		

A	$u(t, x) = t^2 + x^2$
B	$u(t, x) = t^2 - x^2$
C	$u(t, x) = \sin(x + t)$
D	$u(t, x) = x^2 + 2t$

1	$u_t(t, x) = u_x(t, x)$
2	$u_{tt}(t, x) = u_{xx}(t, x)$
3	$u_{tt}(t, x) = -u_{xx}(t, x)$
4	$u_t(t, x) = u_{xx}(t, x)$

Problem 3) (10 points)

a) (6 points) Select 6 of the integrals $A - H$ in the lower tables and match them with their names in the following table:

name	label A-H
line integral	
flux integral	
surface area	
arc length	
volume	
area	

$\int \int_R x^2 - y^2 \, dx dy$	A
$\int \int_R 1 \, dx dy$	B
$\int \int \int_R 1 \, dx dy dz$	C
$\int \int \int_R x^2 + z^2 \, dx dy dz$	D

$\int \int_R \vec{F}(\vec{r}(u, v)) \cdot \vec{r}_u \times \vec{r}_v \, dudv$	E
$\int_a^b \vec{F}(\vec{r}(t)) \cdot \vec{r}'(t) \, dt$	F
$\int_a^b \vec{r}'(t) \, dt$	G
$\int \int_R \vec{r}_u \times \vec{r}_v \, dudv$	H

b) (4 points)

derivative	enter A-D
divergence	
curl	
gradient	
directional derivative	

The middle column of the following table is obtained by applying a derivative operation to the object in the left column. Fill in the correct label (A-D) of that operation into the above table.

object	derivative	label
$\vec{F}(x, y, z) = \langle -y, x, x \rangle$	$\langle 0, -1, 2 \rangle$	A
$\vec{F}(x, y, z) = \langle x^2, y, x \rangle$	$2x + 1$	B
$f(x, y, z) = x^2 + y^2 + z$	$\langle 2x, 2y, 1 \rangle$	C
$f(x, y, z) = x^3 + 5y^2$	$10y$	D

Problem 4) (10 points)

Consider the tetrahedron with vertices

$$A = (0, 1, -1), B = (4, 0, -1), C = (2, 1, 3), \text{ and } D = (2, 2, 0).$$

- a) (3 points) What is the area of the parallelogram spanned by \vec{AB} and \vec{AD} ?
- b) (3 points) Find the volume of the parallelepiped spanned by \vec{AC} , \vec{AB} and \vec{AD} .
- c) (4 points) Determine the distance between the two skew lines AB and CD .

Problem 5) (10 points)

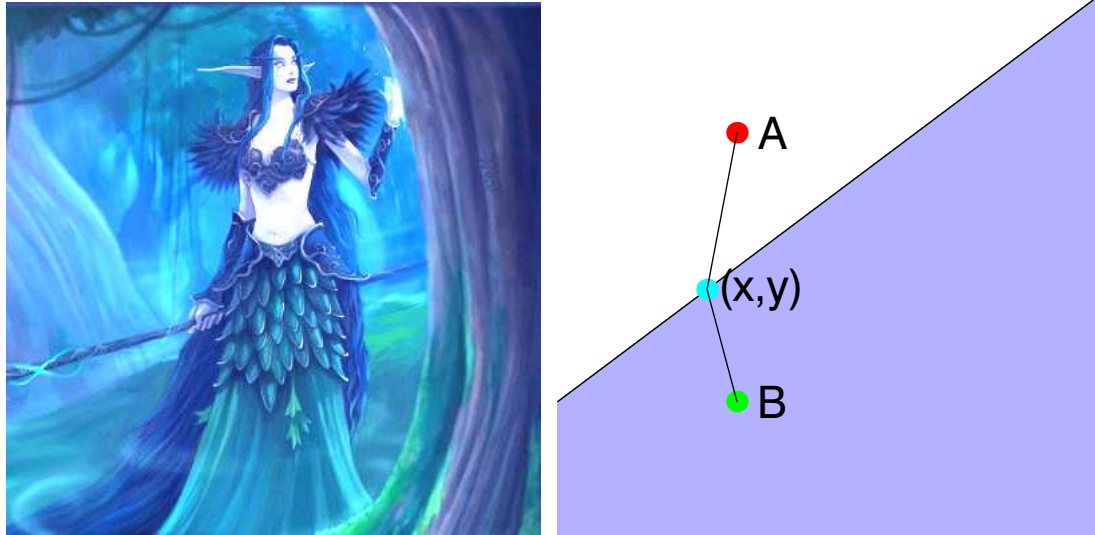
- a) (5 points) The curl of $\vec{F}(x, y) = \langle -e^{xy}, y \rangle$ is equal to a scalar function $f(x, y)$. Estimate $f(1.1, 0.001)$ by linear approximation.
- b) (5 points) Using the same function as in a), the equation $f(x, y) = \text{curl}(\vec{F})(x, y) = 1$ defines y as a function $g(x)$ of x near $x = 1$. Find $g'(1)$.

Problem 6) (10 points)

Find all the critical points of the function $f(x, y) = y^3 - 3y^2 + 4x + x^2 - 3$ and classify them by telling whether they are local maxima, local minima or saddle points.

Problem 7) (10 points)

A nightelf in the game World of Warcraft runs from $A = (0, 2)$ to $B = (0, 0)$ along a straight line segment from A to (x, y) and swims through the lake $x - y \geq -1$ from (x, y) to a gold chest located at $B = (0, 0)$ again on a straight line segment. The effort from A to (x, y) is the square of the distance from A to (x, y) . Her effort from (x, y) to B is 2 times the squared distance from (x, y) to B . Using the Lagrange method, find the choice of a drop point (x, y) on the lake shore that minimizes her effort.



Problem 8) (10 points)

Evaluate the line integral

$$\int_C \vec{F} \cdot d\vec{r},$$

where C is the curve given by

$$\vec{r}(t) = \left\langle \frac{t\pi}{2}, 1-t, t^3 \right\rangle, 0 \leq t \leq 1$$

and

$$\vec{F}(x, y, z) = \langle e^{y^2} + z \cos(xz), 2xye^{y^2}, x \cos(xz) \rangle.$$

Problem (9) (10 points)

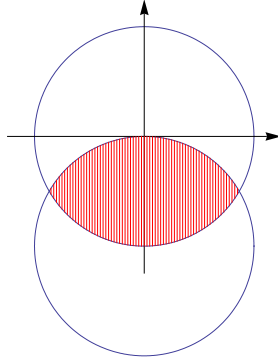
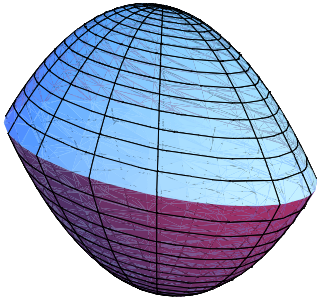
The picture shows an unidentified flying object (UFO). Although it is unidentified, we know its shape. One part of the surface

$$x^2 + y^2 + z^2 = 4$$

and the other part of the surface is

$$x^2 + y^2 + (z+2)^2 = 4.$$

Find the surface area of the UFO.



Problem 10) (10 points)

Evaluate the following integral

$$\int_0^2 \int_1^3 \int_{z^2}^4 xz \cos(y^2) dy dx dz .$$

Problem 11) (10 points)

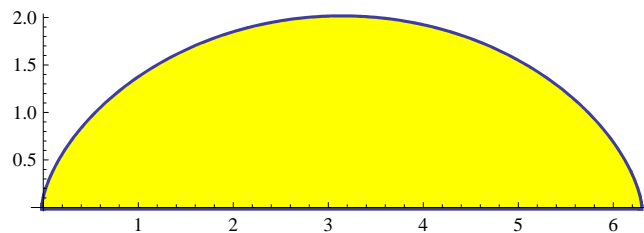
Let $\vec{F}(x, y, z) = \langle x + yz, xye^{-xz}, e^{-xz} \rangle$. Find

$$\iint_S \vec{F} \cdot d\vec{S} ,$$

where S is the surface $z = 1 - x^2 - y^2, z \geq 0$ oriented so that the normal vector points upwards.

Problem 12) (10 points)

Find the area of the region on the plane enclosed by the curve $\vec{r}(t) = \langle t - \sin(t), 1 - \cos(t) \rangle$ with $0 \leq t \leq 2\pi$ and the x -axes.



Problem 13) (10 points)

Evaluate the integral

$$\int \int_S \operatorname{curl}(\vec{F}) \cdot d\vec{S} ,$$

where $\vec{F}(x, y, z) = \langle xe^{y^2}z^3 + 2xyze^{x^2+z}, x + z^2e^{x^2+z}, ye^{x^2+z} + ze^x \rangle$ and where S is the part of the ellipsoid $x^2 + y^2/4 + (z + 1)^2 = 2$, $z > 0$ oriented so that the normal vector points upwards.

Problem 14) (10 points)

Let E be the rectangular solid $0 \leq x \leq a, 0 \leq y \leq b, 0 \leq z \leq 1$ and let S be the boundary of E . The surface S consists of 6 planar pieces where each is oriented so that the normal vector points outwards. Given the vector field

$$\vec{F} = \langle -x^2 - 4xy, -yz, 12z \rangle ,$$

for which parameters a, b is the flux integral

$$\int \int_S \vec{F} \cdot d\vec{S}$$

a global maximum?